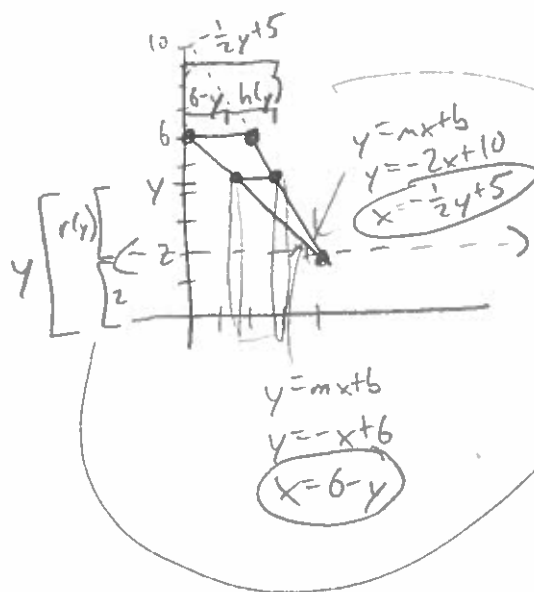


④ Find the volume of the solid of revolution obtained by rotating the triangle with vertices  $(4, 2)$ ,  $(2, 6)$ ,  $(0, 6)$  around the axis  $y=2$ . (Cylindrical Shell Method)



$$r(y) + 2 = y$$

$$r(y) = y - 2$$

$$(6 - y) + h(y) = -\frac{1}{2}y + 5$$

$$h(y) = \frac{1}{2}y - 1$$

$$V = 2\pi \int_2^6 (y-2) \left(\frac{1}{2}y - 1\right) dy$$

$$= 2\pi \int_2^6 \left(\frac{1}{2}y^2 - 2y + 2\right) dy$$

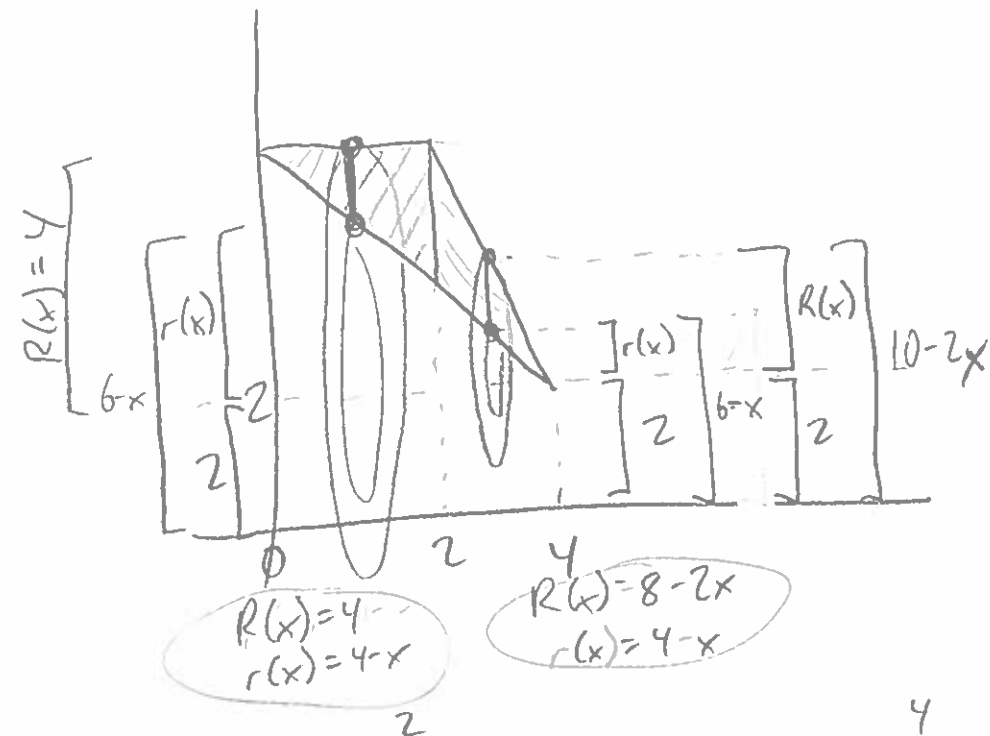
$$= 2\pi \left[ \frac{1}{6}y^3 - y^2 + 2y \right]_2^6$$

$$= 2\pi \left[ \left( \cancel{36} - 36 + 12 \right) - \left( \frac{8}{6} - 4 + 4 \right) \right]$$

$$= 2\pi \left[ \frac{64}{6} \right] = \boxed{\frac{64\pi}{3}}$$

④ using Washer Method

(Split into two pieces...)



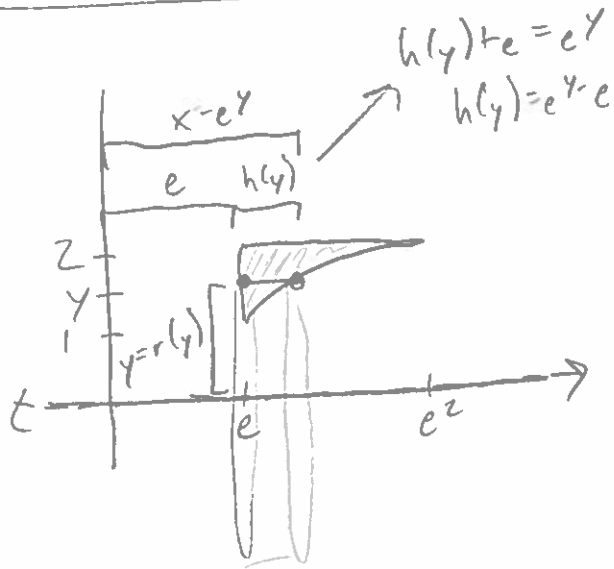
$$V = \pi \int_0^2 ((4)^2 - (4-x)^2) dx + \pi \int_2^4 ((8-2x)^2 - (4-x)^2) dx$$

$$= \dots$$

$$= \frac{40}{3} \pi + 8\pi$$

$$= \boxed{\frac{64\pi}{3}}$$

5) Find the volume of the solid of revolution obtained by rotating the region bounded by  $x=e$ ,  $y=2$ ,  $y=\ln x$  around the  $x$ -axis.



$$V = 2\pi \int_1^2 (y)(e^y - e) dy$$

$$= 2\pi \int_1^2 ye^y dy - 2\pi e \int_1^2 y dy$$

Let  $u=y$   $v=e^y$   
 $du=dy$   $dv=e^y dy$

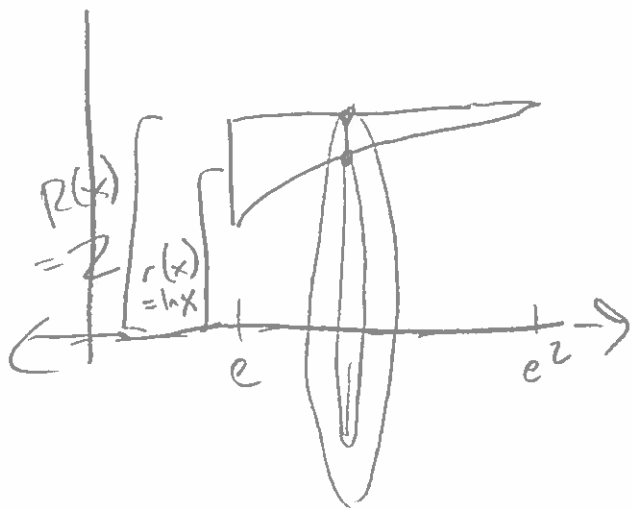
$$= 2\pi [ye^y - \int e^y dy]_1^2 - 2\pi e \left[ \frac{1}{2} y^2 \right]_1^2$$

$$= 2\pi [ye^y - e^y]_1^2 - 2\pi e \left[ 2 - \frac{1}{2} \right]$$

$$= 2\pi \left[ 2e^2 - \frac{e^2}{e^2} - (e - e) \right] - 2\pi e \left[ \frac{3}{2} \right]$$

$$= \boxed{2\pi e^2 - 3\pi e}$$

5) using Washer Method



$$V = \pi \int_e^{e^2} ((2)^2 - (\ln x)^2) dx$$

$$= 4\pi \int_e^{e^2} dx - \pi \int_e^{e^2} (\ln x)^2 dx$$

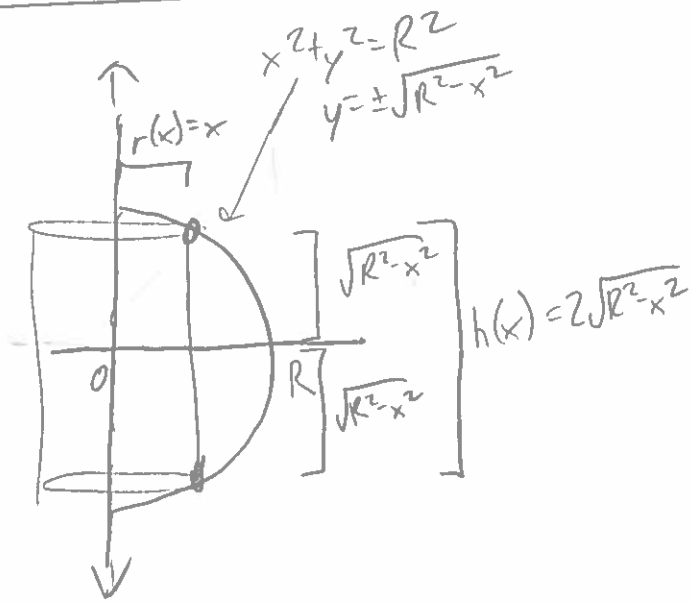
$$= \vdots \quad \vdots \quad \leftarrow \text{Tricky integration by parts}$$

$$= 4\pi(e^2 - e) - \pi(2e^2 - e)$$

$$= \boxed{2\pi e^2 - 3\pi e}$$

$$\left. \begin{aligned} \int (\ln x)^2 dx &= (\ln x)^2 x - \int x \frac{2 \ln x}{x} dx \\ &= (\ln x)^2 x - 2x \ln x + \int 2x \frac{1}{x} dx \\ &= (\ln x)^2 x - 2x \ln x + 2x + C \end{aligned} \right\}$$

⑥ Use cylindrical shells to prove  $V = \frac{4}{3}\pi R^3$  for a sphere with radius  $R$ .



$$V = 2\pi \int_0^R (x)(2\sqrt{R^2 - x^2}) dx$$

$$= 2\pi \int_0^R 2x\sqrt{R^2 - x^2} dx$$

$$\text{Let } u = R^2 - x^2 \quad \begin{array}{l} x=R \rightarrow u=0 \\ x=0 \rightarrow u=R^2 \end{array}$$

$$du = -2x dx$$

$$-du = 2x dx$$

$$= 2\pi \int_{R^2}^0 -\sqrt{u} du$$

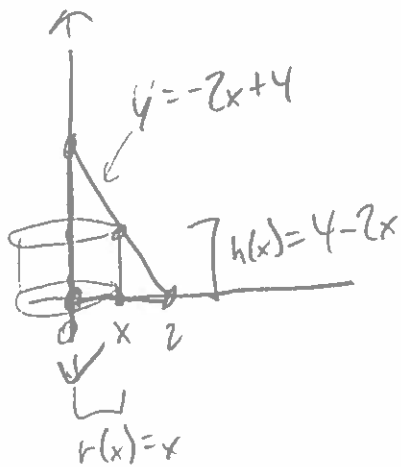
$$= 2\pi \int_0^{R^2} u^{1/2} du$$

$$= \frac{4}{3}\pi \left[ u^{3/2} \right]_0^{R^2}$$

$$= \frac{4}{3}\pi R^3 - \cancel{\frac{4}{3}\pi 0^3}$$

$$= \frac{4}{3}\pi R^3 \quad \square$$

⑦ What integral is produced by the cylindrical shell method for the volume of the solid of revolution obtained by rotating the triangle with vertices  $(0,0)$ ,  $(2,0)$ ,  $(0,4)$  around the  $y$ -axis?



$$V = 2\pi \int_0^2 (x)(4-2x) dx$$

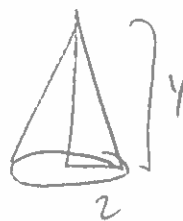
$$= 2\pi \int_0^2 (4x - 2x^2) dx$$

$$= 2\pi \left[ 2x^2 - \frac{2}{3}x^3 \right]_0^2$$

$$= 2\pi \left[ \left( 8 - \frac{16}{3} \right) - (0-0) \right]$$

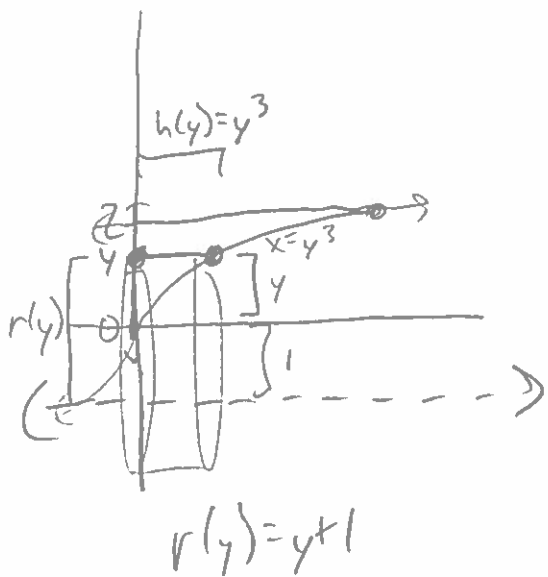
$$= \frac{16\pi}{3}$$

Also, this is a cone of height 4 & radius 2:



$$\begin{aligned} V &= \frac{1}{3} \pi r^2 h \\ &= \frac{1}{3} \pi (2)^2 (4) \\ &= \frac{16\pi}{3} \end{aligned}$$

8) What integral is produced by cylindrical shells for the volume of the solid of revolution obtained by rotating the region bounded by  $x=0$ ,  $y=2$ ,  $x=y^3$  around the axis  $y=-1$ ?



$$V = 2\pi \int_0^2 (y+1)(y^3) dy$$

$$= 2\pi \int_0^2 y^4 + y^3 dy$$

$$= 2\pi \left[ \frac{1}{5} y^5 + \frac{1}{4} y^4 \right]_0^2$$

$$= 2\pi \left[ \left( \frac{32}{5} + 4 \right) - (0+0) \right]$$

$$= \frac{104\pi}{5}$$